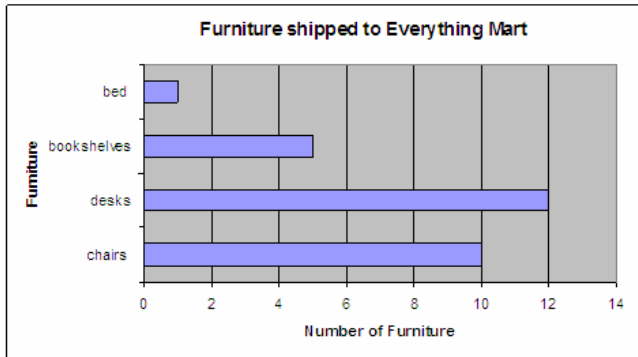


## HORIZONTAL BAR GRAPH



There are more desks than any other furniture. There is only one bed that was shipped to Everything Mart. There are ten chairs and five bookshelves. There are twenty eight pieces of furniture being shipped to Everything Mart.

## TABLE/ TALLY CHART

Sports Equipment	Tally of Sports Equipment shipped to Everything Mart
Basketball	
Soccer balls	
Tennis Rackets	
Golf Clubs	

There are more basketballs than any other sports equipment with twenty seven basketballs. There are the same number of tennis rackets as there are golf clubs. The fewest kind of sports equipment shipped to Everything Mart are soccer balls with only twelve.

## PERFORMANCE TASKS GRASPS

SECOND GRADE: GRAPHING



BY: SUSAN SHIN

## PERFORMANCE TASK GRASPS

Four large boxes were shipped in the Everything Mart Truck. These were the sixteen items in the four large boxes.

**Box 1:** 4 apples, 24 shirts, 10 chairs and 27 basketballs

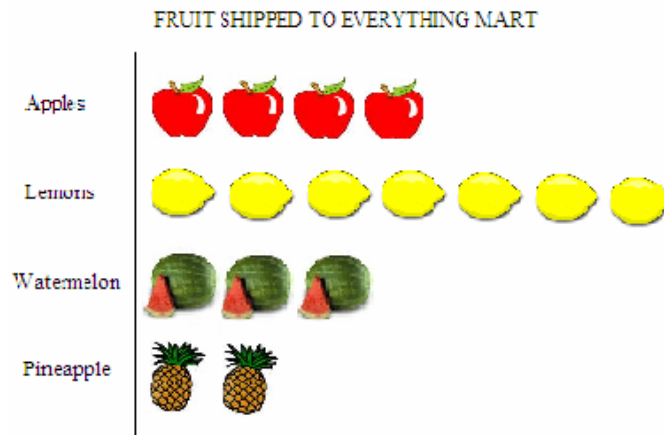
**Box 2:** 30 jackets, 12 soccer balls, 12 desks, and 7 lemons

**Box 3:** 5 bookshelves, 16 tennis rackets, 3 watermelon and 11 pants

**Box 4:** 16 golf clubs, 8 dresses, 2 pineapples and 1 bed

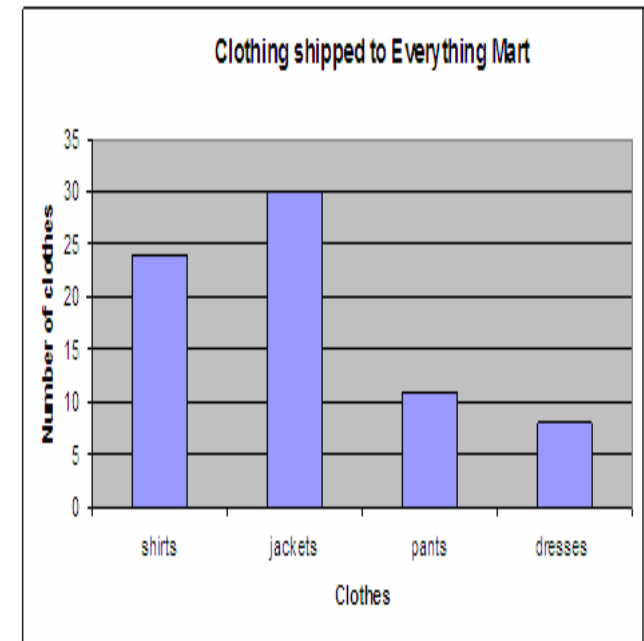
**Product/Performance:** You will sort the sixteen different products into four categories: food, clothing, furniture, and sports equipment. You will create a picture graph for the food, a vertical bar graph for the clothing, a horizontal bar graph for the furniture and a table for the sports equipment. All four graphs need to be labeled correctly and be as neat as possible so that it is easy to read. Each analyst will turn in his or her own writings and interpretations about the graphs. Write a few sentences for each graph explaining what you see and know from the graph. You and your group will put all four graphs on a poster board and present it to the class and Mr. George Graph. You will need to work kindly with your group members by sharing and doing things fairly.

## PICTURE GRAPH



There are more lemons than any other fruit. The pineapples have the least number. There are sixteen fruit in total including all the apples, lemons, watermelons and pineapples. There are an even number of apples and pineapples while there are an odd number of lemons and watermelons.

## VERTICAL BAR GRAPH



There are 30 jackets which have the most number of items among all the products that were shipped to Everything Mart. There are more pants than there are dress. There are more shirts than pants and dresses combined.